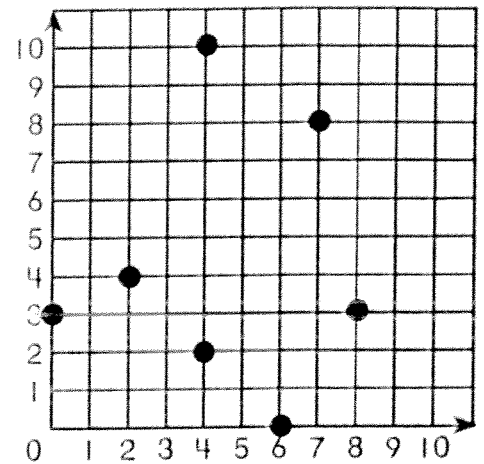
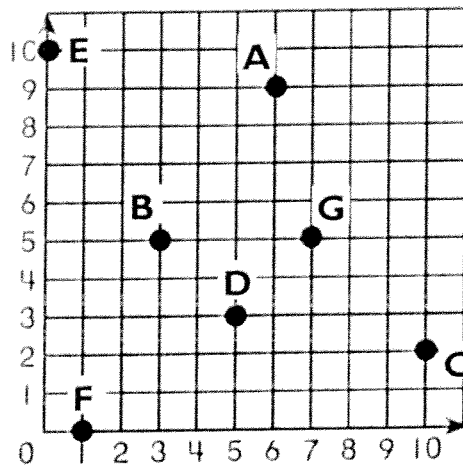



Write the ordered pair for point A. **4** A

Plot point M on the grid below. **5.** (7,8) M



Points Scored at the Soccer Match



= 2 points

6. The All Stars scored 2 fewer points than the team they played. Which team did the All Stars play? Show how you know.

Read the Math Story and answer the question.
Choose a strategy to show your thinking in the space provided.

7. Miss Ruiz's class collected canned goods for one week. On Monday, they collected 30 canned goods. Each day they collected 15 more canned goods than the day before. How many canned goods did they collect on Friday?