

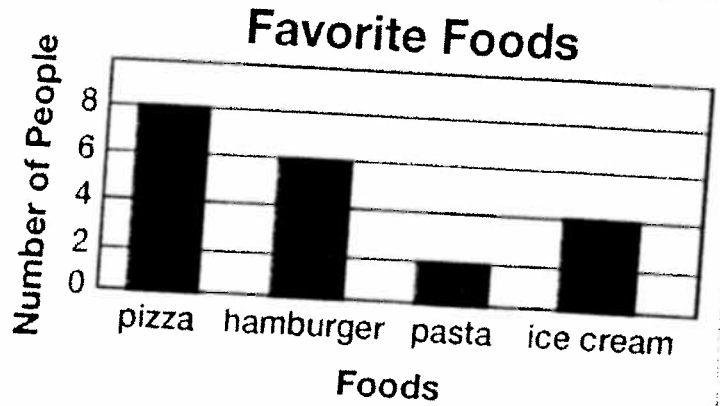
Chapter 6 Pre-test

Name _____

1.

Look at the bar graph. Which statement is true?


- a. More people chose hamburgers than pizza.
- b. More people chose pasta than pizza.
- c. More people chose pasta than hamburgers.
- d. More people chose hamburgers than pasta.



2.

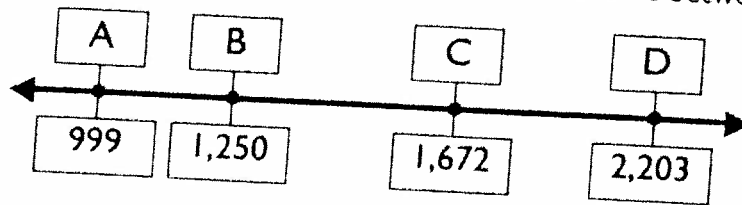
Look at the bar graph. Which statement is true?

- a. 2 fewer people chose pasta than hamburgers.
- b. 4 fewer people chose pasta than hamburgers.
- c. 2 more people chose pasta than hamburgers.
- d. 4 more people chose pasta than hamburgers.



3.

Use the number line for items 1 – 2. Choose a strategy. Find the difference between the given points.



What is the difference between point C and point D?

8.

Name: _____

Date: _____

Interpreting Data in a Graph

Practice to review... I can read pictographs and bar graphs!

Which graph matches the data? Show how you know.

| School Groups at the Museum | |
|-----------------------------|--------|
| Week | Number |
| week 1 | 5 |
| week 2 | 21 |
| week 3 | 19 |
| week 4 | 20 |
| week 5 | 10 |

