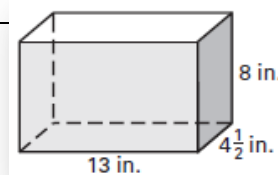
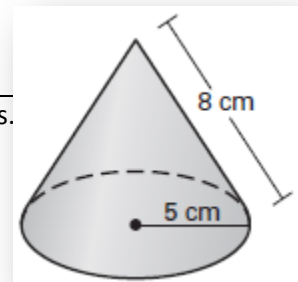


1. What shape is your base?	2. Find the area of the base? Label your units.
3. Find the volume of your solid. Label your units	4. What is the SURFACE AREA of your solid? Label your units.

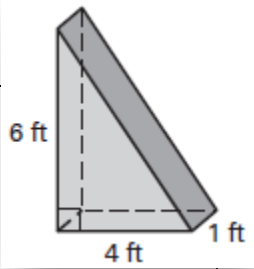


1. What shape is your base?	2. Find the area of the base? Label your units.
3. Find the volume of your solid. Label your units	4. What is the SURFACE AREA of your solid? Label your units.



1. What shape is your base?

2. Find the area of the base? Label your units.

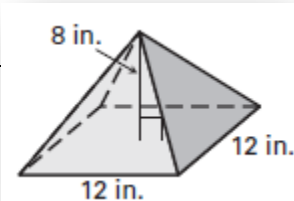


3. Find the volume of your solid. Label your units

4. What is the SURFACE AREA of your solid? Label your units.

1. What shape is your base?

2. Find the area of the base? Label your units.



3. Find the volume of your solid. Label your units

4. What is the SURFACE AREA of your solid? Label your units.